

MENTAL MATHS

worksheet

solve these questions:

What is the sum of 35 and 15?

- a) 40
- b) 50
- c) 60
- d) 70

What is the difference between 80 and 30?

- a) 50
- b) 60
- c) 40
- d) 70

What is 24 divided by 3?

- a) 6
- b) 8
- c) 7
- d) 9

What is the product of 5 and 6?

- a) 30
- b) 25
- c) 35
- d) 40

Lily has 12 candies, and her friend gave her 8 more. How many candies does Lily have now?

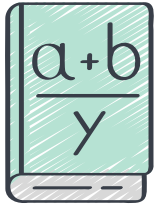
- a) 15
- b) 20
- c) 10
- d) 22

Tom had 25 balloons, and he gave 10 to his friend. How many balloons does Tom have now?

- a) 35
- b) 10
- c) 15
- d) 20

Sarah has 14 marbles and she gave 4 to her brother. How many marbles does she have now?

- a) 10
- b) 20
- c) 12
- d) 14



MENTAL MATHS

worksheet

solve these questions:

How much is 9 multiplied by 3?

- a) 27
- b) 18
- c) 21
- d) 24

What is the result of 42 divided by 7?

- a) 6
- b) 5
- c) 7
- d) 8

If a child has 16 stickers and buys 4 more, how many stickers does the child have now?

- a) 20
- b) 18
- c) 22
- d) 24

What is the sum of 45 and 20?

- a) 55
- b) 65
- c) 75
- d) 85

What is the difference between 70 and 25?

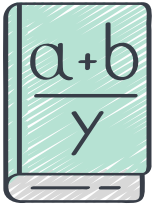
- a) 45
- b) 50
- c) 40
- d) 30

What is 24 divided by 6?

- a) 6
- b) 4
- c) 5
- d) 3

What is the product of 8 and 5?

- a) 35
- b) 45
- c) 40
- d) 50



MENTAL MATHS

worksheet

solve these questions:

Mia has 22 oranges, and her friend gave her 10 more. How many oranges does Mia have now?

- a) 30
- b) 32
- c) 28
- d) 25

Raj had 50 marbles and lost 15. How many marbles does Raj have now?

- a) 40
- b) 30
- c) 35
- d) 45

Tina has 12 pencils and she gave 6 to her friends. How many pencils does she have now?

- a) 8
- b) 6
- c) 12
- d) 9

How much is 7 multiplied by 4?

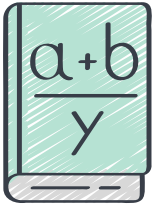
- a) 21
- b) 24
- c) 28
- d) 32

What is the result of 36 divided by 6?

- a) 7
- b) 5
- c) 6
- d) 8

If a person has 18 balloons and buys 7 more, how many balloons does the person have now?

- a) 24
- b) 25
- c) 27
- d) 30



MENTAL MATHS

worksheet

solve these questions:

What is the sum of 60 and 15?

- a) 85
- b) 70
- c) 75
- d) 65

What is the difference between 90 and 30?

- a) 70
- b) 50
- c) 60
- d) 40

What is 30 divided by 5?

- a) 4
- b) 6
- c) 5
- d) 3

What is the product of 9 and 5?

- a) 35
- b) 40
- c) 45
- d) 50

Sam has 14 cupcakes, and his mom baked 12 more. How many cupcakes does Sam have now?

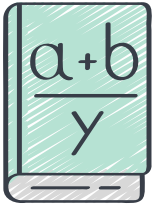
- a) 24
- b) 26
- c) 28
- d) 30

Maria had 42 candies and ate 18 of them. How many candies does she have now?

- a) 24
- b) 26
- c) 30
- d) 32

If a person has 25 books and donates 5, how many books does the person have now?

- a) 20
- b) 15
- c) 25
- d) 30



MENTAL MATHS

worksheet

solve these questions:

How much is 8 multiplied by 3?

- a) 24
- b) 21
- c) 28
- d) 26

What is the result of 49 divided by 7?

- a) 5
- b) 6
- c) 7
- d) 8

If a child has 23 stickers and buys 9 more, how many stickers does the child have now?

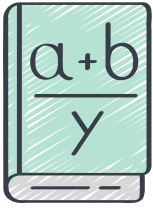
- a) 32
- b) 30
- c) 35
- d) 34

What is the sum of 75 and 25?

- a) 100
- b) 90
- c) 85
- d) 95

What is the difference between 120 and 50?

- a) 60
- b) 70
- c) 80
- d) 90



MENTAL MATHS

worksheet

solve these questions:

What is the sum of 45 and 10?

- a) 50
- b) 55
- c) 60
- d) 65

What is the difference between 80 and 40?

- a) 30
- b) 20
- c) 50
- d) 40

What is 16 divided by 4?

- a) 4
- b) 6
- c) 8
- d) 5

What is the product of 7 and 6?

- a) 42
- b) 36
- c) 40
- d) 48

Sarah had 25 apples, and she gave 10 to her friend. How many apples does she have now?

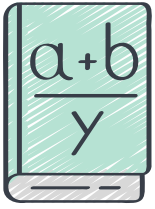
- a) 20
- b) 15
- c) 10
- d) 5

John had 30 marbles and lost 5. How many marbles does John have now?

- a) 35
- b) 40
- c) 25
- d) 20

Tom has 15 pencils and buys 10 more. How many pencils does he have now?

- a) 20
- b) 25
- c) 30
- d) 35



MENTAL MATHS

worksheet

solve these questions:

How much is 5 multiplied by 4?

- a) 15
- b) 18
- c) 20
- d) 25

What is the result of 36 divided by 9?

- a) 4
- b) 5
- c) 6
- d) 3

If a person has 20 toys and buys 5 more, how many toys does the person have now?

- a) 25
- b) 30
- c) 20
- d) 15

What is the sum of 65 and 15?

- a) 75
- b) 80
- c) 85
- d) 90

What is the difference between 90 and 50?

- a) 30
- b) 40
- c) 50
- d) 20

What is 40 divided by 5?

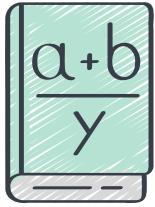
- a) 6
- b) 8
- c) 10
- d) 7

What is the product of 8 and 3?

- a) 18
- b) 24
- c) 27
- d) 21

Tina has 32 candies and eats 12 of them. How many candies does she have now?

- a) 20
- b) 15
- c) 18
- d) 22



MENTAL MATHS

worksheet

solve these questions:

Kevin had 50 stickers and gave 20 to his friend. How many stickers does he have now?

- a) 30
- b) 40
- c) 25
- d) 10

Sally has 18 balloons and buys 7 more. How many balloons does she have now?

- a) 20
- b) 23
- c) 25
- d) 28

How much is 6 multiplied by 5?

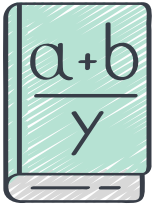
- a) 20
- b) 25
- c) 30
- d) 35

What is the result of 45 divided by 9?

- a) 5
- b) 6
- c) 8
- d) 4

If a person has 28 cookies and eats 8, how many cookies does the person have now?

- a) 18
- b) 20
- c) 16
- d) 12



MENTAL MATHS

worksheet

solve these questions:

What is the sum of 50 and 30?

- a) 80
- b) 75
- c) 70
- d) 85

What is the difference between 100 and 60?

- a) 50
- b) 30
- c) 40
- d) 60

What is 24 divided by 3?

- a) 6
- b) 8
- c) 7
- d) 9

What is the product of 6 and 7?

- a) 42
- b) 48
- c) 36
- d) 40

Emma had 12 books, and her mother bought her 8 more. How many books does she have now?

- a) 18
- b) 22
- c) 20
- d) 16

James had 40 coins and lost 15. How many coins does James have now?

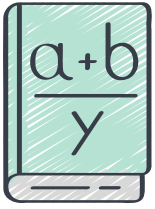
- a) 35
- b) 20
- c) 25
- d) 30

Lily has 22 crayons and buys 5 more. How many crayons does she have now?

- a) 27
- b) 25
- c) 30
- d) 32

How much is 9 multiplied by 4?

- a) 36
- b) 28
- c) 32
- d) 40



MENTAL MATHS

worksheet

solve these questions:

What is the result of 48 divided by 6?

- a) 6
- b) 8
- c) 9
- d) 7

If a person has 35 toys and gives 10 away, how many toys does the person have now?

- a) 25
- b) 30
- c) 35
- d) 20

What is the sum of 55 and 25?

- a) 80
- b) 70
- c) 60
- d) 85

What is the difference between 75 and 35?

- a) 30
- b) 40
- c) 45
- d) 50

What is 32 divided by 8?

- a) 4
- b) 3
- c) 5
- d) 6

What is the product of 7 and 5?

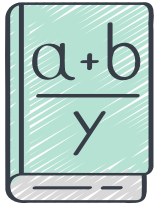
- a) 35
- b) 25
- c) 40
- d) 30

Sam has 15 chocolates and eats 5 of them. How many chocolates does he have now?

- a) 10
- b) 12
- c) 8
- d) 9

Kate had 60 stickers and gave 20 to her friends. How many stickers does she have now?

- a) 40
- b) 50
- c) 45
- d) 35



MENTAL MATHS

worksheet

solve these questions:

Lucas has 18 cookies and eats 3. How many cookies does he have now?

- a) 15
- b) 12
- c) 14
- d) 13

How much is 8 multiplied by 5?

- a) 45
- b) 35
- c) 40
- d) 48

What is the result of 30 divided by 5?

- a) 5
- b) 6
- c) 4
- d) 8

If a person has 50 marbles and gives 15 away, how many marbles does the person have now?

- a) 40
- b) 30
- c) 35
- d) 45